


Make equal groups - sharing



1 Share the objects equally.

a 18 acorns between three squirrels.




There are _____ acorns altogether.

There are _____ squirrels.

There are _____ acorns for each squirrel.

b 9 doughnuts between three plates.




There are _____ doughnuts altogether.

There are _____ plates.

There are _____ doughnuts on each plate.

c 12 eggs between four boxes.

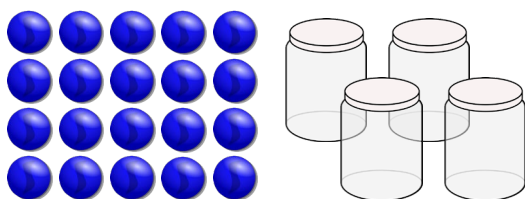


There are _____ eggs altogether.

There are _____ boxes.

There are _____ eggs in four boxes.

d 20 marbles between four jars.



There are _____ marbles altogether.

There are _____ jars.

There are _____ marbles in each jar.

2 Share the objects.

15 marbles between three jars.

$$\square \div \square = \square$$

12 marbles between three jars.

$$\square \div \square = \square$$

